



Handwriting:

Please practise your spellings in your neatest handwriting. Try to make all of your half height letters the same size.

**Spellings to practise
this week**

fast last
father class
grass pass
plant path
bath people

English Challenge

This week in English we have been learning about instructions. Can you write a set of instructions about how to play your favourite game? This could be board games, card games, computer games.

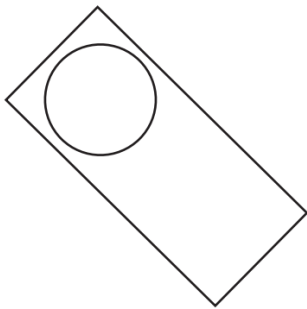
Numeracy Challenge

In Maths we have been focusing our learning on 2D shapes. Can you complete a shape hunt and find different 2D shapes around your house? These could be a range of shapes from; squares, rectangles, pentagons and hexagons.

This half term's big learning question is...

Our learning project is - What was Britain like when the Queen first sat on her throne?

How you choose to present your home learning project is up to you! You could present it on a computer program, as a model, as a piece of writing or artwork! Be creative and have fun!




Tick the names of the **two** shapes in this picture.

Tick **two**.

- triangle
- square
- rectangle
- circle
- hexagon

Tick the shape that does **not** have a line of symmetry.

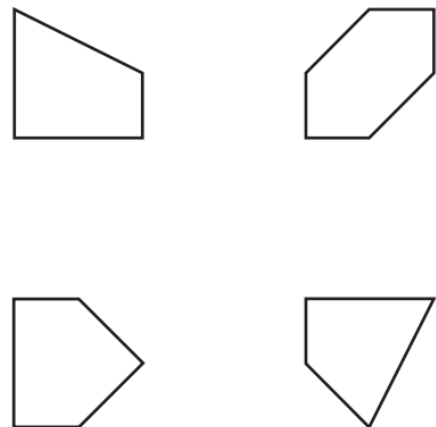


Tick the **two** sentences that are correct.

Tick **two**.

- A square has sides of equal length.
- A square has curved sides.
- A square has lines of symmetry.
- A square has five sides.

Tick the **pentagon**.



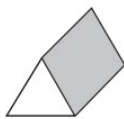
A



B



C



D



E

Which shape has exactly **5** faces?

Write the letter.